

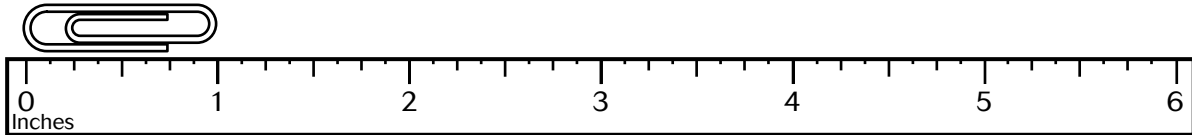


Name \_\_\_\_\_



# Inches and Feet

**R** 8-2

A paper clip is about 1 inch long.  
There are 12 inches in 1 foot.



Find objects like the ones shown.  
Work with a partner. Estimate.  
Then use a ruler to measure.

	Estimate	Measure
1. 	about _____ inches	about _____ inches
2. 	about _____ inches	about _____ inches

About how many inches or feet would the real one be?  
Circle the better estimate.

3.



car

9 feet long

9 inches long

4.



bicycle

5 feet long

2 feet long

5.




tricycle

5 feet long

2 feet long

6.



key

8 inches long

3 inches long