



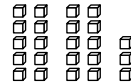
Name _____

Regrouping

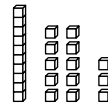
R 2-6

You can show 23 in different ways.

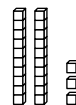
0 tens 23 ones





1 ten 13 ones



2 tens 3 ones

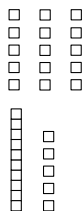


Use tens and ones models to show each number.

Draw  for ten. Draw  for one.

Then regroup to show the number another way. Record.

1. 15



_____ tens _____ ones

_____ tens _____ ones

2. 22

_____ tens _____ ones

_____ tens _____ ones

_____ tens _____ ones

3. 27

_____ tens _____ ones

_____ tens _____ ones

_____ tens _____ ones